

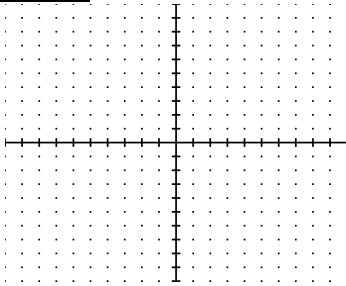
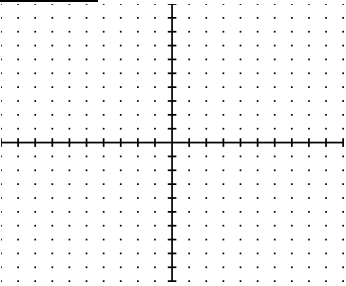
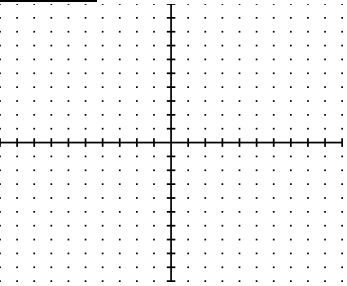
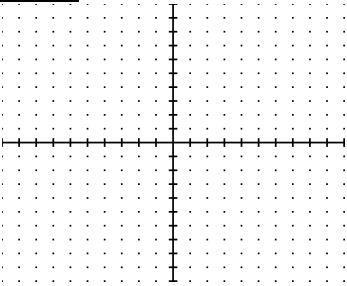
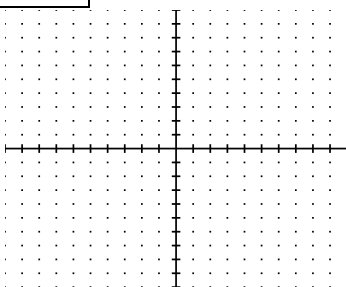
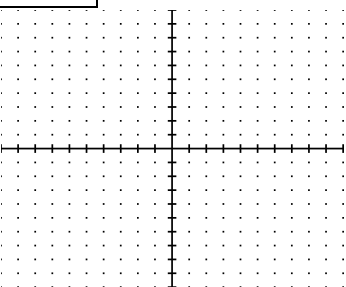
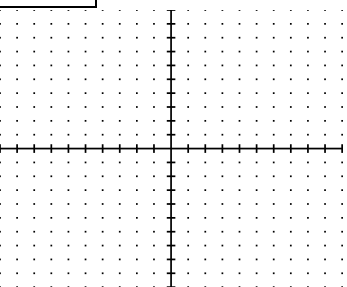
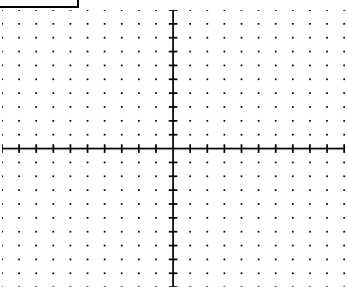
Way Cool Algebra

Name _____ Period _____

Writing Equations - Linear**Slope-Intercept**

Assign # _____

Plot the points, draw the line, and **DETERMINE THE EQUATION.**

1 $(-9,0) \text{ \& } (6,5)$  Equation _____	2 $(-6,3) \text{ \& } (2,-9)$  Equation _____	3 $(-6,-1) \text{ \& } (6,5)$  Equation _____	4 $(-1,5) \text{ \& } (2,-7)$  Equation _____
5 $(-9,3) \text{ \& } (2,3)$  Equation _____	6 $(-4,10) \text{ \& } (9,-10)$  Equation _____	7 $(-5,2) \text{ \& } (10,5)$  Equation _____	8 $(-10,-10) \text{ \& } (5,-1)$  Equation _____

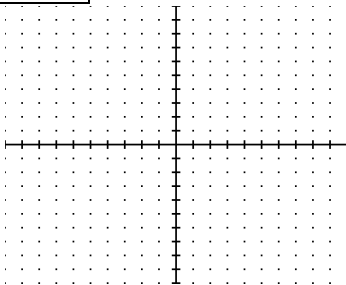
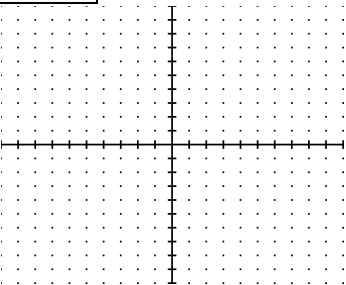
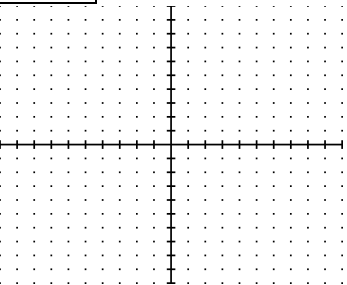
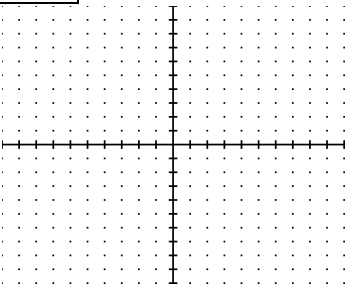
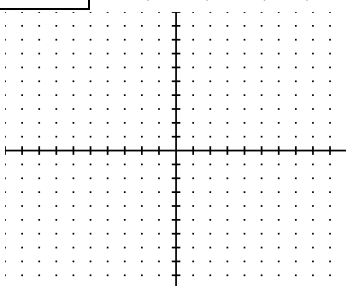
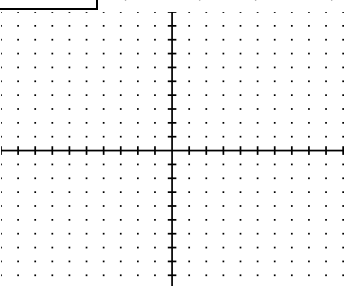
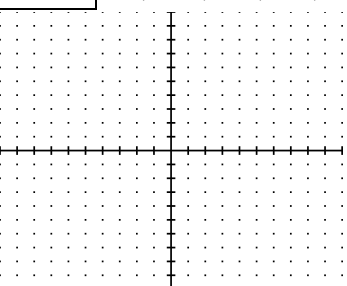
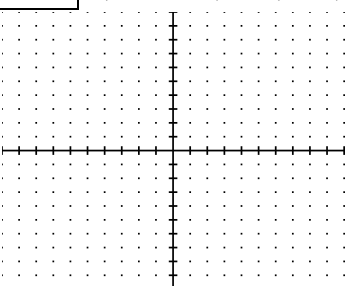
Way Cool Algebra

Name _____ Period _____

Writing Equations - Linear**Slope-Intercept**

Assign # _____

Plot the points, draw the line, and **DETERMINE THE EQUATION.**

1 $(-9,0) \text{ \& } (6,5)$  Equation _____	2 $(-6,3) \text{ \& } (2,-9)$  Equation _____	3 $(-6,-1) \text{ \& } (6,5)$  Equation _____	4 $(-1,5) \text{ \& } (2,-7)$  Equation _____
5 $(-9,3) \text{ \& } (2,3)$  Equation _____	6 $(-4,10) \text{ \& } (9,-10)$  Equation _____	7 $(-5,2) \text{ \& } (10,5)$  Equation _____	8 $(-10,-10) \text{ \& } (5,-1)$  Equation _____